

Instructions: Use the shape above the line to determine which of the shapes below the lines represents a ROTATED copy. Mirrored or similar images do not count. TIP: Try to use the process of elimination to narrow down your options.

EXAMPLE



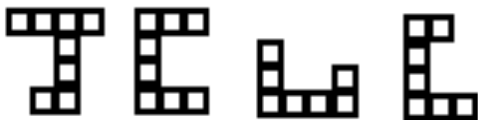
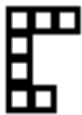
A B C D

1.



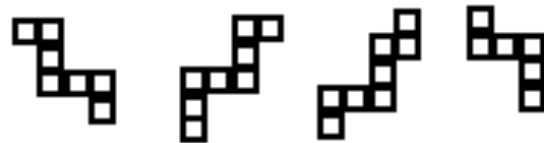
A B C D

2.



A B C D

3.

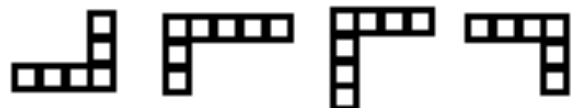


A B C D

5.



A B C D



A B C D